

3



KIBABII UNIVERSITY

**UNIVERSITY EXAMINATIONS
2020/2021 ACADEMIC YEAR**

**FOURTH YEAR FIRST SEMESTER
MAIN EXAMINATIONS**

FOR THE DEGREE OF BSC (CHEMISTRY)

COURSE CODE: SCH 420

COURSE TITLE: ORGANIC SPECTROSCOPY

DATE: 21/07/2021

TIME: 2:00-4:00PM

INSTRUCTIONS TO CANDIDATES

Time: 2 Hours

Answer question ONE and any other TWO of the remaining

KIBU observes ZERO tolerance to examination cheating

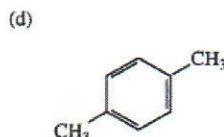
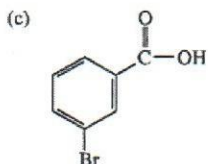
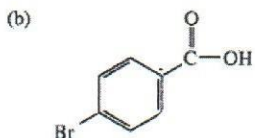
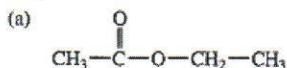
QUESTION ONE (30 MARKS)

- a) Differentiate between the following (4 marks)
i. Wavelength and Wave number
ii. Chromophore and Auxochrome

- b) Determine index of hydrogen deficiency for the following compounds (4 marks)
i. C_6H_{12}
ii. $C_5H_8Br_2$
iii. $C_5H_{11}N_3$
iv. $C_6H_8Br_2O_3$

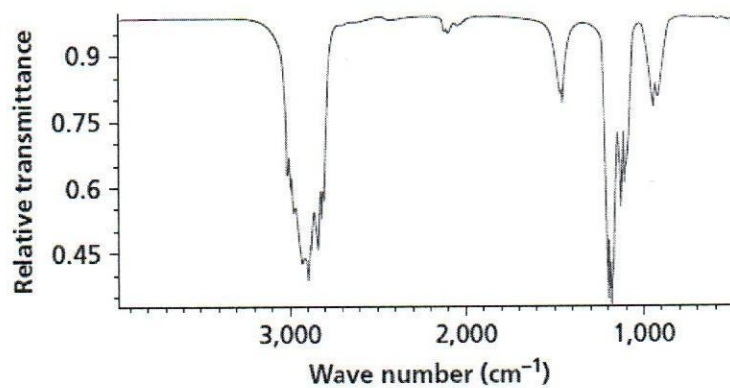
- c) State any four application of UV-VIS spectroscopy (4 marks)

- d) Predict the number of peaks that you would expect in proton-decoupled ^{13}C spectrum of each of the following compounds (4 marks)



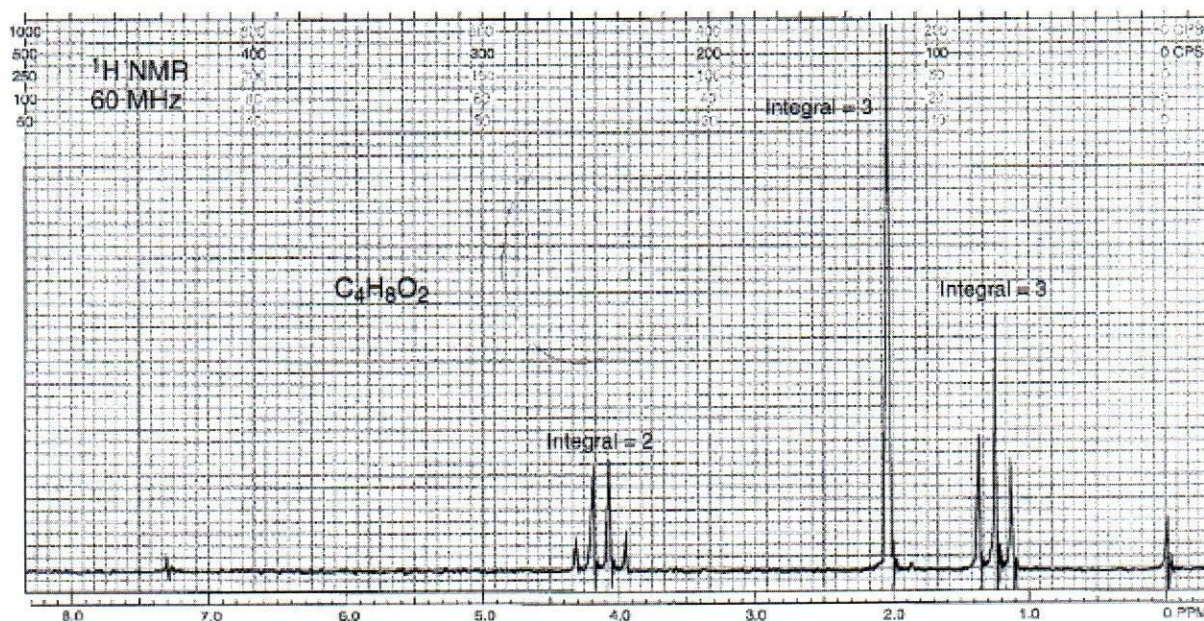
- e) Define the following terms as used in Mass spectrometry (4 marks)

- i. Molecular ion peak
 - ii. Base peak
 - iii. Radical cation
 - iv. Fragmentation ion
- f) Briefly describe the processes and instrumentation involved in electron impact ionization techniques used in mass spectrometry (3 marks)
- g) The spectrum seen here was taken as a KBr pellet and belongs to a compound with the formula C_2H_6O .



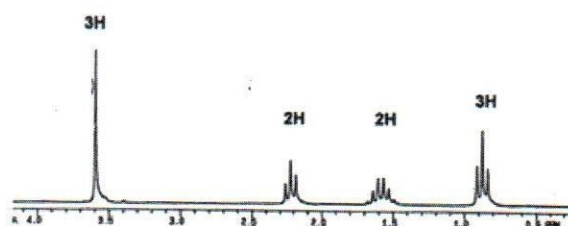
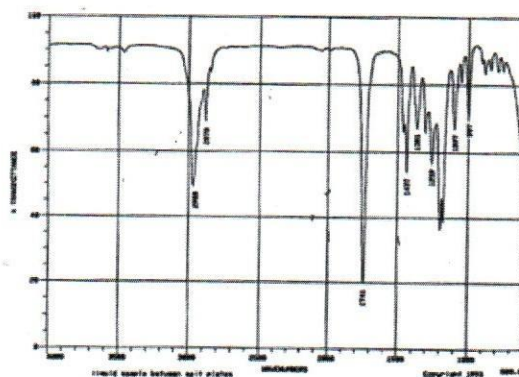
Determine the identity of the compound. (3 marks)

- h) The HNMR spectrum below is for an ester compound the formula $C_4H_8O_2$. Provide its structure (3 marks)



QUESTION TWO (20 MARKS)

- a) A proton has resonance 90 Hz downfield from TMS when the field strength is 1.41 Tesla and the oscillator frequency is 60 MHz
- i. What will be its shift in Hertz if the field strength is increased to 2.82 Tesla and the oscillator frequency is 120 MHz **(3 marks)**
 - ii. What will be its chemical shift in parts per million (δ) **(3 marks)**
- b) Provide a structure of a compound having molecular formula $C_5H_{10}O_2$ that is consistent with the following spectra.
Show your work by assigning all the relevant peaks in IR and NMR spectra **(12 marks)**



QUESTION THREE (20 MARKS)

- a) Show that

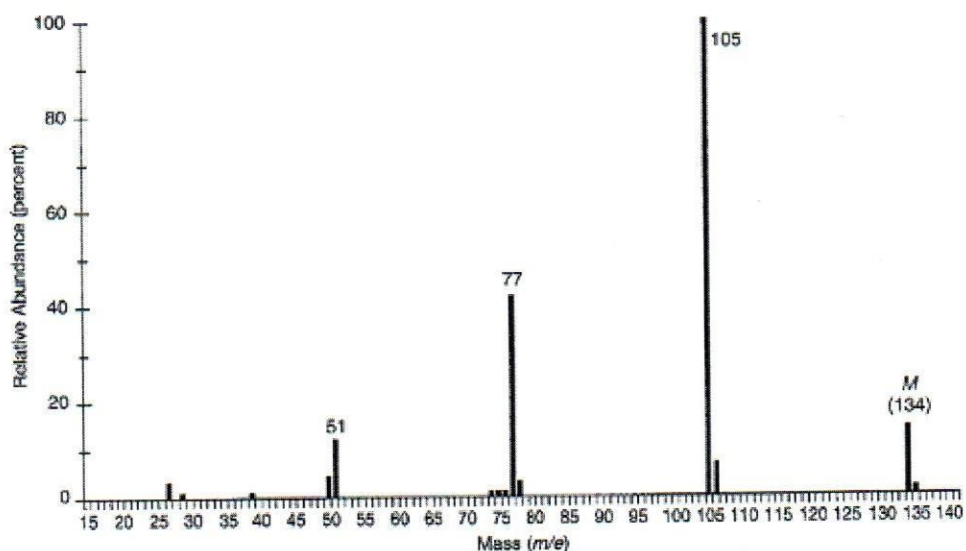
$$m/z = \frac{H^2 r^2}{2V}$$

(5 marks)

- b) An unknown compound has the mass spectrum shown below. The infrared spectrum of the unknown shows significant peaks at

3102 cm^{-1}	3087	3062	3030	1688
1598	1583	1460	1449	1353
1221	952	746	691	

There is also a band from aliphatic C-H stretching from 2879 to 2979 cm^{-1}

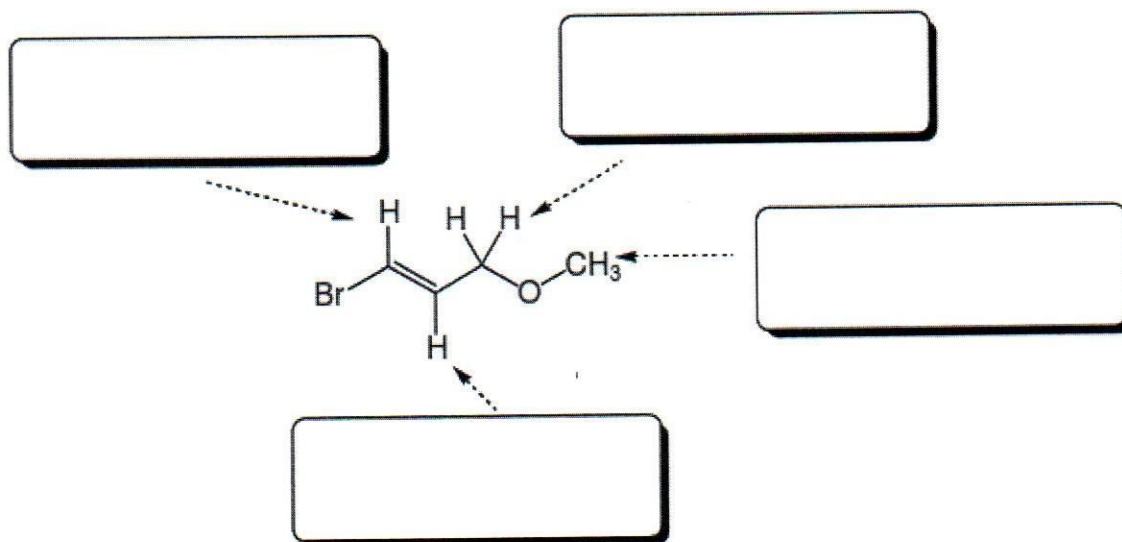


Deduce the structure

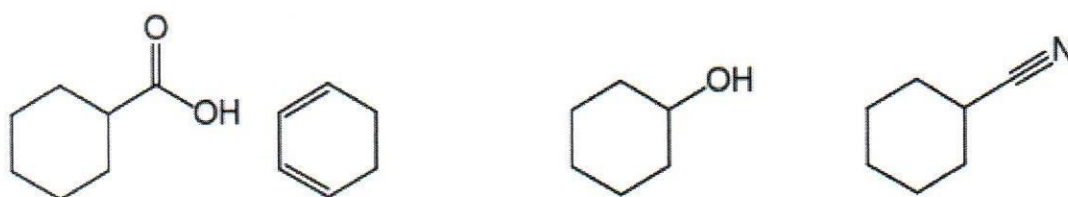
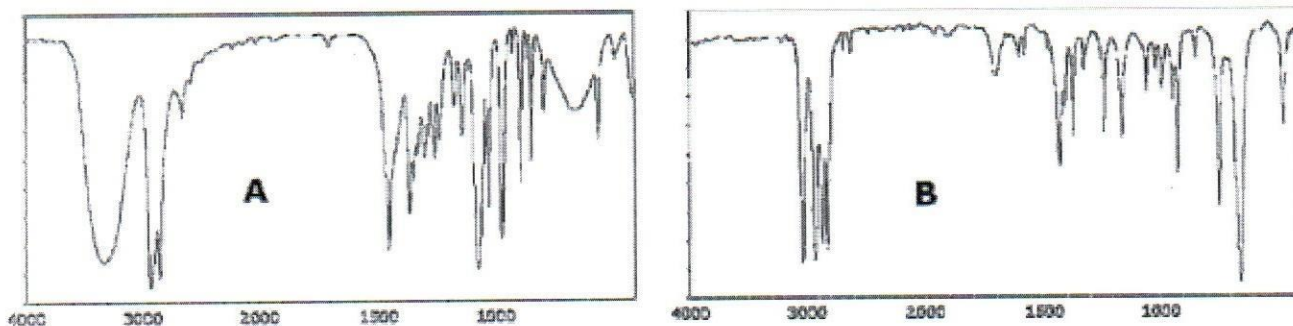
(15 marks)

QUESTION FOUR (20 MARKS)

- a) The ^1H NMR of this compound should have four signals. Predict the splitting patterns (singlet, doublet, doublet of doublet etc) you would see for each signal (4 marks)



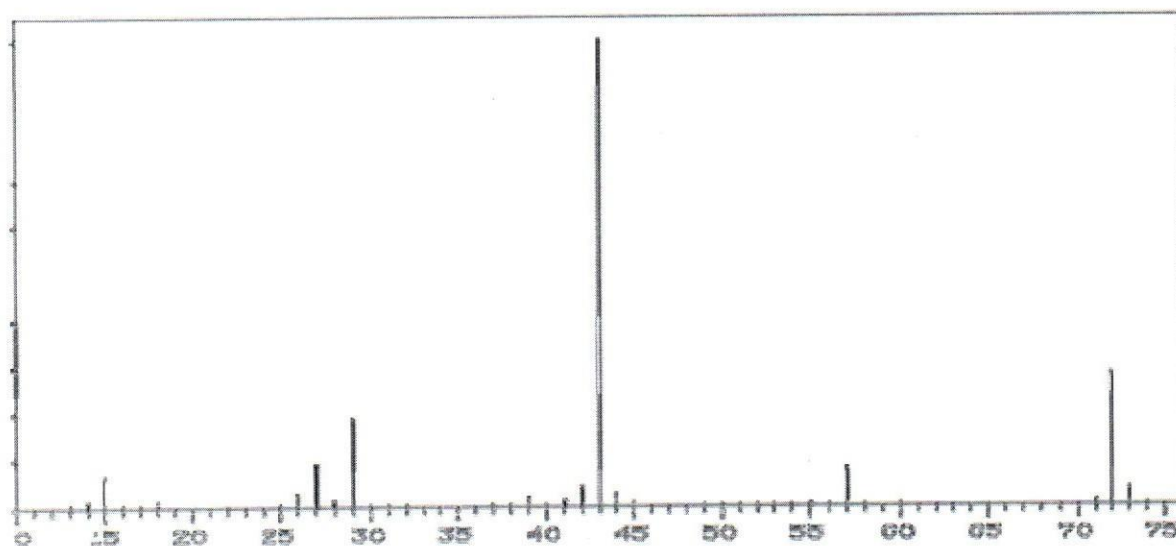
b) Below are the IR spectra A and B for two of four compounds



With reason, determine which spectrum belong to which compound

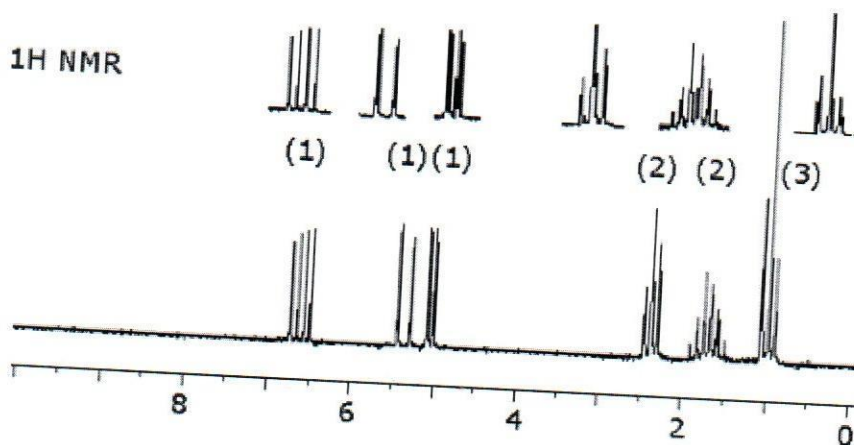
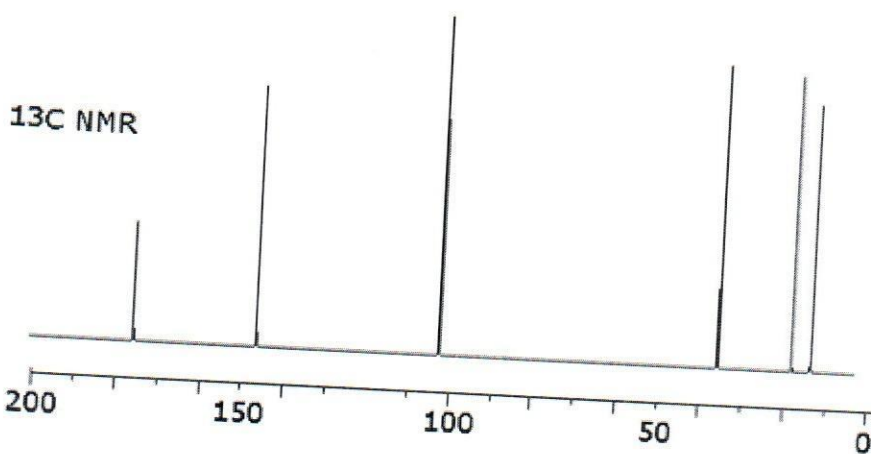
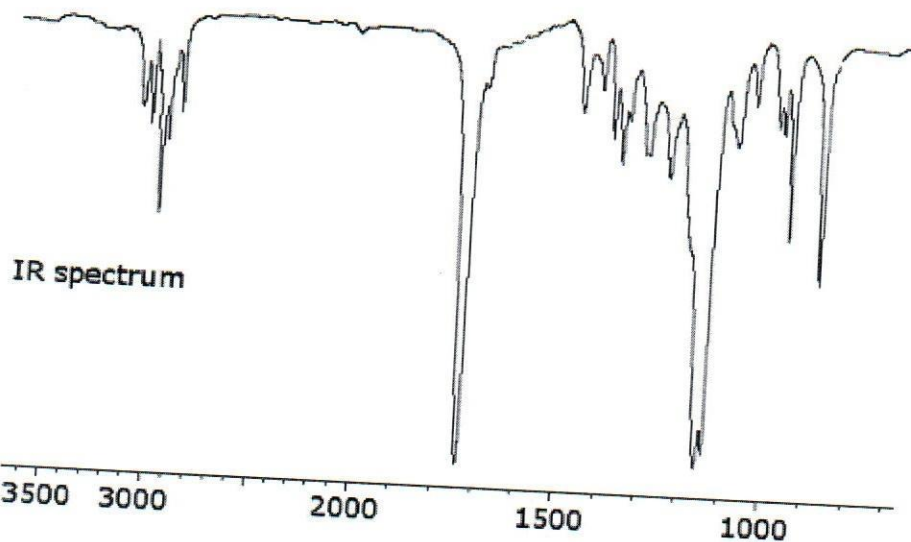
(8 marks)

c) Below is the mass spectrum of 2-butanone. Explain the large peak at 43 and the small peak at 73 (6 marks)



QUESTION FIVE (20 MARKS)

Study the IR, ^{13}C NMR and ^1H NMR spectra for an unknown compound with the formula $\text{C}_6\text{H}_{10}\text{O}_2$, then answer the question on the next page.



- i. Determine degrees of unsaturation in this compound **(4 marks)**
- ii. In the IR, what does the signal at about 1740 suggest? **(1 marks)**
- iii. In the ^{13}C NMR, what does the chemical shift of the signal at about 105 suggest? **(1 marks)**
- iv. In the ^1H NMR, what does the chemical shift of the signal at about 5.2 suggest? **(1 marks)**
- v. In the ^1H NMR, what does the integration of the signal at about 2.3 suggest? **(1 marks)**
- vi. In the ^1H NMR, what does the splitting pattern of the signal at about 1.0 suggest? **(2 marks)**
- vii. Deduce the structure of this unknown compound **(10 marks)**

APPENDICES

Approximate IR Absorption Frequencies

Bond	Frequency (cm ⁻¹)	Intensity
O-H (alcohol)	3650-3200	Strong, broad
O-H (carboxylic acid)	3300-2500	Strong, very broad
N-H	3500-3300	Medium, broad
C-H	3300-2700	Medium
C≡N	2260-2220	Medium
C≡C	2260-2100	Medium to weak
C=O	1780-1650	Strong
C-O	1250-1050	Strong

Approximate ¹H NMR Chemical Shifts

Hydrogen	δ (ppm)
CH ₃	0.8-1.0
CH ₂	1.2-1.5
CH	1.4-1.7
C=C-CH _x	1.7-2.3
O=C-CH _x	2.0-2.7
Ph-CH _x	2.3-3.0
≡C-H	2.5
R ₂ N-CH _x	2.0-2.7
I-CH _x	3.2
Br-CH _x	3.4
Cl-CH _x	3.5
F-CH _x	4.4
O-CH _x	3.2-3.8
C=CH	4.5-7.5
Ar-H	6.8-8.5
O=CH	9.0-10.0
ROH	1.0-5.5
ArOH	4.0-12.0
RNH _x	0.5-5.0
CONH _x	5.0-10.0
RCOOH	10-13

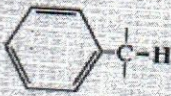
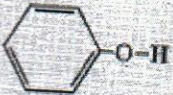
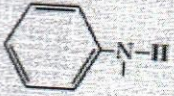
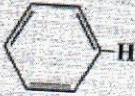
Approximate ¹³C NMR Chemical Shifts

Carbon	δ (ppm)
<i>Alkanes</i>	
Methyl	0-30
Methylene	15-55
Methine	25-55
Quaternary	30-40
<i>Alkenes</i>	
C=C	80-145
<i>Alkynes</i>	
C≡C	70-90
<i>Aromatics</i>	
Benzene	110-170
<i>Alcohols, Ethers</i>	
C-O	50-90
<i>Amines</i>	
C-N	40-60
<i>Halogens</i>	
C-F	70-80
C-Cl	25-50
C-Br	10-40
C-I	-20-10
<i>Carbonyls, C=O</i>	
R ₂ C=O	190-220
RXC=O (X = O or N)	150-180

A SIMPLIFIED CORRELATION CHART

Type of Vibration			Frequency (cm^{-1})	Intensity	Page Reference	
C-H	Alkanes	(stretch)	3000-2850	s	29	
		-CH ₃	(bend)	1450 and 1375		m
		-CH ₂	(bend)	1465		m
	Alkenes	(stretch)	3100-3000	m	31	
		(out-of-plane bend)	1000-650	s		
	Aromatics	(stretch)	3150-3050	s	41	
		(out-of-plane bend)	900-690	s		
	Alkyne	(stretch)	ca. 3300	s	33	
	Aldehyde		2900-2800	w	54	
			2800-2700	w		
C-C	Alkane	Not interpretatively useful				
C=C	Alkene	1680-1600	m-w	31		
	Aromatic	1600 and 1475	m-w	41		
C≡C	Alkyne	2250-2100	m-w	33		
C=O	Aldehyde	1740-1720	s	54		
	Ketone	1725-1705	s	56		
	Carboxylic acid	1725-1700	s	60		
	Ester	1750-1730	s	62		
	Amide	1680-1630	s	68		
	Anhydride	1810 and 1760	s	71		
	Acid chloride	1800	s	70		
	C-O	Alcohols, ethers, esters, carboxylic acids, anhydrides	1300-1000	s	45, 48, 60, 62, and 71	
O-H	Alcohols, phenols					
	Free	3650-3600	m	47		
	H-bonded	3400-3200	m	47		
	Carboxylic acids	3400-2400	m	61		
N-H	Primary and secondary amines and amides					
	(stretch)	3500-3100	m	72		
	(bend)	1640-1550	m-s	72		
C-N	Amines	1350-1000	m-s	72		
C=N	Imines and oximes	1690-1640	w-s	75		
C≡N	Nitriles	2260-2240	m	75		
X-C=Y	Allenes, ketenes, isocyanates, isothiocyanates	2270-1940	m-s	75		
N-O	Nitro (R-NO ₂)	1550 and 1350	s	77		
S-H	Mercaptans	2550	w	79		
S-O	Sulfoxides	1050	s	79		
	Sulfones, sulfonyl chlorides, sulfates, sulfonamides	1375-1300 and 1350-1140	s	80		
C-X	Fluoride	1400-1000	s	83		
	Chloride	785-540	s	83		
	Bromide, iodide	<667	s	83		

APPROXIMATE CHEMICAL SHIFT RANGES (PPM) FOR SELECTED TYPES OF PROTONS^a

$R-CH_3$		0.7 - 1.3			
$R-CH_2-R$		1.2 - 1.4		$R-\overset{ }{N}-\overset{ }{C}-H$	2.2 - 2.9
R_3CH		1.4 - 1.7		$R-\overset{ }{S}-\overset{ }{C}-H$	2.0 - 3.0
<hr/>					
$R-\overset{ }{C}=\overset{ }{C}-\overset{ }{C}-H$		1.6 - 2.6		$I-\overset{ }{C}-H$	2.0 - 4.0
$R-\overset{O}{\parallel}{C}-\overset{ }{C}-H, H-\overset{O}{\parallel}{C}-\overset{ }{C}-H$		2.1 - 2.4		$Br-\overset{ }{C}-H$	2.7 - 4.1
$RO-\overset{O}{\parallel}{C}-\overset{ }{C}-H, HO-\overset{O}{\parallel}{C}-\overset{ }{C}-H$		2.1 - 2.5		$Cl-\overset{ }{C}-H$	3.1 - 4.1
$N=\overset{ }{C}-\overset{ }{C}-H$		2.1 - 3.0		$R-\overset{O}{\parallel}{S}-O-\overset{ }{C}-H$	ca. 3.0
		2.3 - 2.7		$RO-\overset{ }{C}-H, HO-\overset{ }{C}-H$	3.2 - 3.8
$R-C\equiv C-H$		1.7 - 2.7		$R-\overset{O}{\parallel}{C}-O-\overset{ }{C}-H$	3.5 - 4.8
<hr/>					
$R-S-H$	var	1.0 - 4.0 ^b		$O_2N-\overset{ }{C}-H$	4.1 - 4.3
$R-\overset{ }{N}-H$	var	0.5 - 4.0 ^b		$F-\overset{ }{C}-H$	4.2 - 4.8
$R-O-H$	var	0.5 - 5.0 ^b		<hr/>	
	var	4.0 - 7.0 ^b		$R-\overset{ }{C}=\overset{ }{C}-H$	4.5 - 6.5
	var	3.0 - 5.0 ^b			6.5 - 8.0
$R-\overset{O}{\parallel}{C}-\overset{ }{N}-H$	var	5.0 - 9.0 ^b		$R-\overset{O}{\parallel}{C}-H$	9.0 - 10.0
				$R-\overset{O}{\parallel}{C}-OH$	11.0 - 12.0